

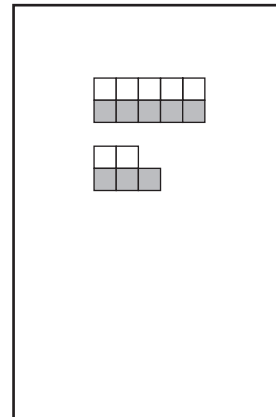
- | | | | | | |
|---------|----------|-----------|---------|----------|----------|
| January | February | March | April | May | June |
| July | August | September | October | November | December |

October

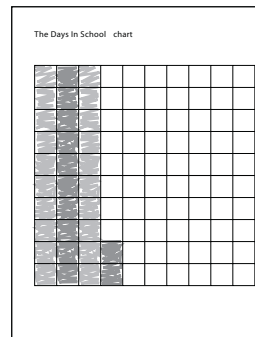
Sunday	Monday	Tuesday	Wednesday	Thursday	Friday	Saturday
				Where is the ladybug? 1	2	3
4	5	6	7	8	Where is the butterfly? 9	10
11	12	13	14	15	16	Where is the ladybug? 17
18	19	20	21	22	23	24
Where is the butterfly? 25	26	27	28	29	30	31

Month	Day	Year
10	15	01

Days this Month



Days in School



How Many Altogether?

$$30 + 2 = 32$$

$$10 + 10 + 10 + 2 = 32$$

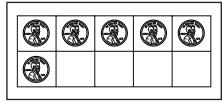
$$(5 + 5) + (5 + 5) + (5 + 5) + 2 = 32$$

o c t o b e r

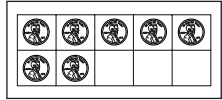
Daily Routines & Daily Challenges



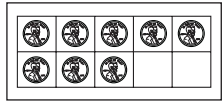
Monday's Money



$5\text{¢} + 1\text{¢} = 6\text{¢}$



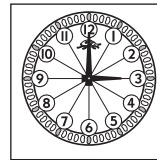
$5\text{¢} + 2\text{¢} = 7\text{¢}$




$5\text{¢} + 3\text{¢} = 8\text{¢}$



Tuesday's Time, Tally & Temperature



3:00
three o'clock

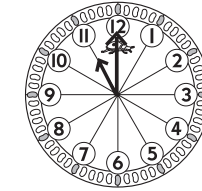


4:00
four o'clock

Tuesday's Temperatures chart

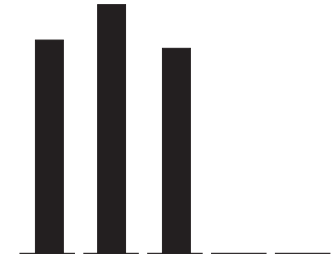
October	68	73	65		
---------	----	----	----	--	--

Month



11:00

Time of Day

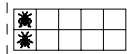


Wednesday's Workout

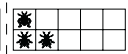
Student Number Corner

Bugs Doubles & Neighbors Flashcards


Cut around the flashcard boxes. Practice with a friend.




$1 + 1 = ?$



$1 + 2 = ?$



$2 + 2 = ?$



$2 + 3 = ?$



$3 + 3 = ?$



$3 + 4 = ?$



$4 + 4 = ?$



$4 + 5 = ?$



$5 + 5 = ?$




Thursday's Thinking

Student Number Corner

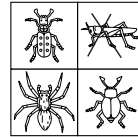
NAME Matt DATE _____

Which Bug Does NOT Belong?

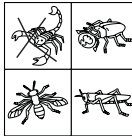
Cross out the bug in each set that does not belong. In the box below each set of bugs explain why you think it doesn't belong.



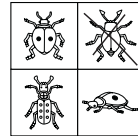
No WNZ



Ha 92



big tal



No 2pots



Friday's Figuring

Today is Friday, October 1



$1 + 0 = 1$

$10 - 9 = 1$

$20 - 19 = 1$

$100 - 99 = 1$



1 penny is 1¢



$5 - 4 = 1$



Johnny has 5¢ in his pocket but 4 pennies fell through a hole. How much does he have left?



$4 - 3 = 1$

Suzie had 4 goldfish but 3 died. How many were left?